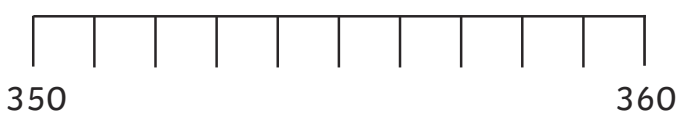
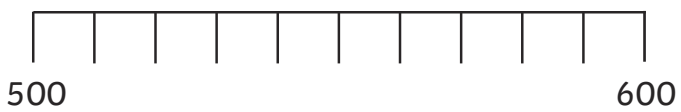
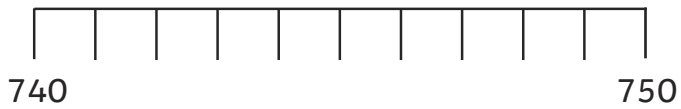
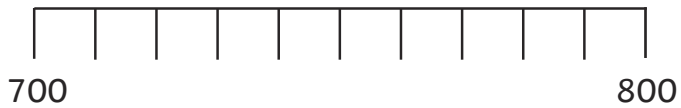
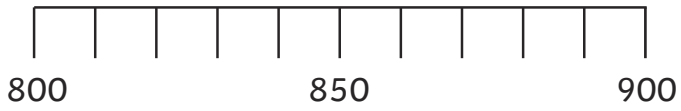
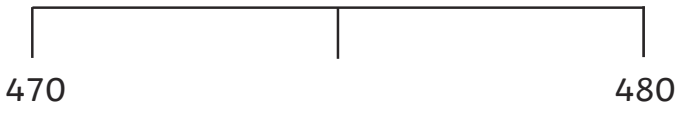
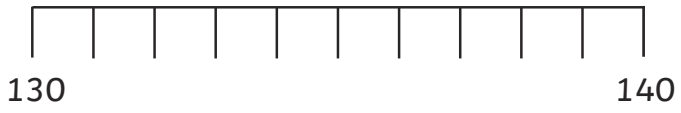



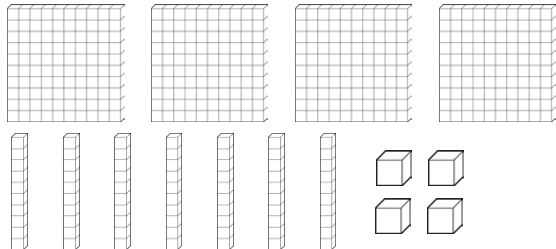

Estimation Station

Cut out the estimation cards. Match and stick the cards next to the most suitable number line. Estimate and mark the represented number on each number line.



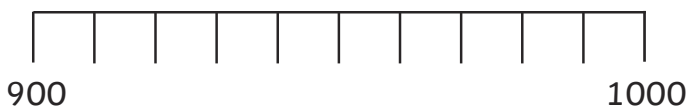
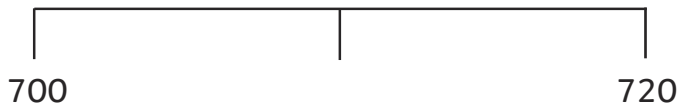
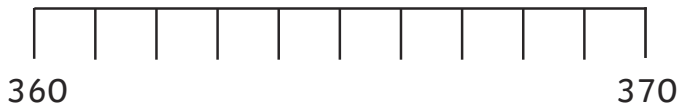
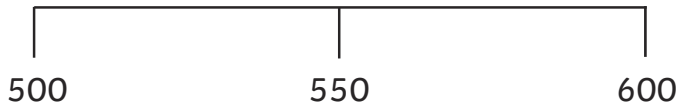
Estimation Station



$500 + 30 + 0$	<table border="1"> <thead> <tr> <th data-bbox="794 114 1018 174">H</th> <th data-bbox="1018 114 1241 174">T</th> <th data-bbox="1241 114 1465 174">O</th> </tr> </thead> <tbody> <tr> <td data-bbox="794 174 1018 353">○ ○ ○</td> <td data-bbox="1018 174 1241 353">○ ○ ○ ○ ○</td> <td data-bbox="1241 174 1465 353">○ ○ ○ ○ ○ ○ ○ ○ ○</td> </tr> </tbody> </table>	H	T	O	○ ○ ○	○ ○ ○ ○ ○	○ ○ ○ ○ ○ ○ ○ ○ ○
H	T	O					
○ ○ ○	○ ○ ○ ○ ○	○ ○ ○ ○ ○ ○ ○ ○ ○					
<p>745</p>	<p>eight hundred and forty</p>						
							
	<p>one hundred + thirty + four</p>						

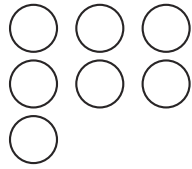






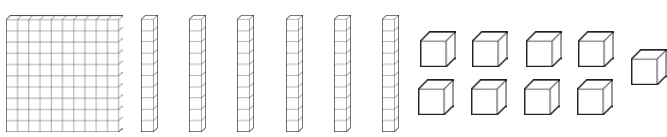

Estimation Station

Cut out the estimation cards. Match and stick the cards next to the most suitable number line. Estimate and mark the represented number on each number line.



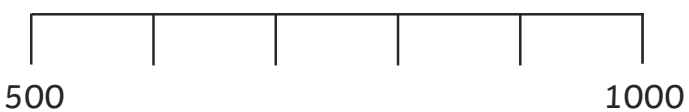
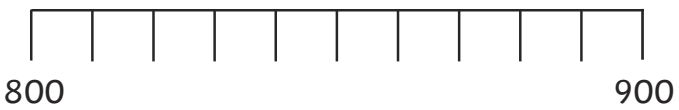
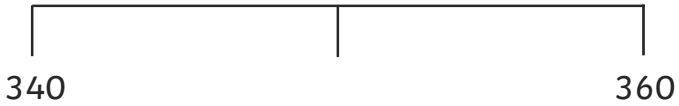
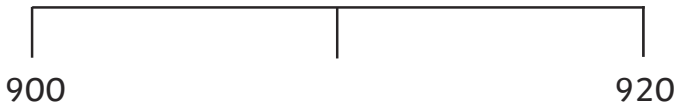
Estimation Station



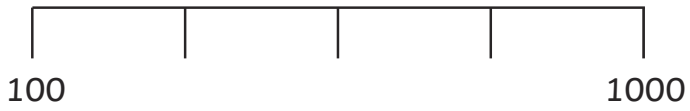
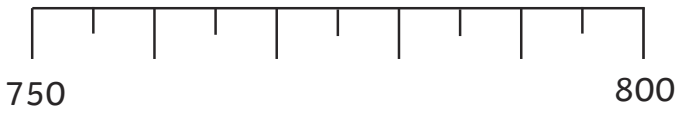
$320 + 40 + 8$	<table border="1"> <thead> <tr> <th data-bbox="794 107 1013 174">H</th> <th data-bbox="1013 107 1232 174">T</th> <th data-bbox="1232 107 1455 174">O</th> </tr> </thead> <tbody> <tr> <td data-bbox="794 174 1013 353">  </td> <td data-bbox="1013 174 1232 353"></td> <td data-bbox="1232 174 1455 353">  </td> </tr> </tbody> </table>	H	T	O			
H	T	O					
							
<p>986</p>	<p>five hundred and sixty-six</p>						
							
	<p>three hundred + forty + eight</p>						

Estimation Station

Cut out the estimation cards. Match and stick the cards next to the most suitable number line. Estimate and mark the represented number on each number line.



Estimation Station


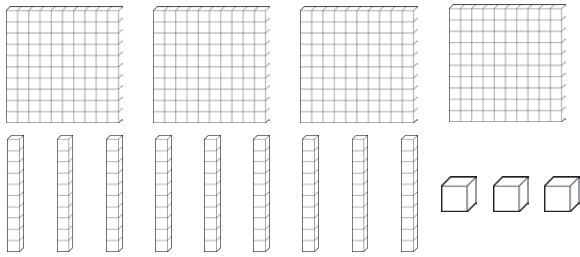



$$730 + 23 + 4$$

H	T	O
○ ○ ○	○ ○ ○	○ ○ ○
○	○ ○ ○	○ ○ ○
	○ ○	

906

five hundred
and twenty-two



three hundred and twenty
+ thirty-four + two